



1 Zeichne die Punkte ein, schreibe die Rechnung auf, und rechne.



$$\square + \square = \square$$


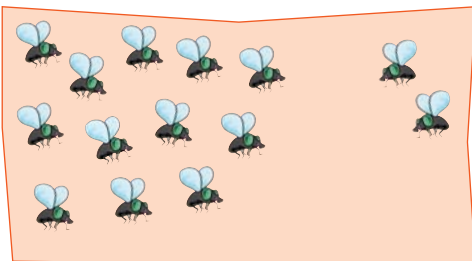
$$\square + \square = \square$$

2 Rechne aus, und trage die Lösung ein.



$$\square + \square = \square$$



$$\square + \square = \square$$



$$\square + \square = \square$$

$$\square + \square = \square$$

3 Welche Rechnung passt? Verbinde, und rechne.



$$13 + \underline{\quad} + 2 = \underline{\quad}$$

$$12 + 3 + \underline{\quad} = \underline{\quad}$$

$$14 + \underline{\quad} + 2 = \underline{\quad}$$

$$11 + \underline{\quad} + \underline{\quad} = \underline{\quad}$$

